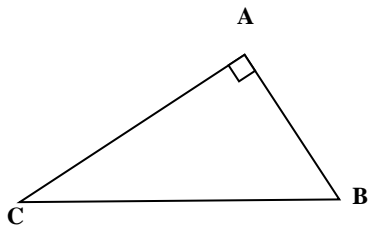


## TRIGONOMETRIE

Dans chacun des cas ci-dessous compléter les égalités proposées.

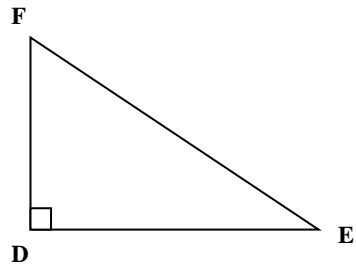
a)



$$\cos \hat{B} =$$

$$\tan \hat{C} =$$

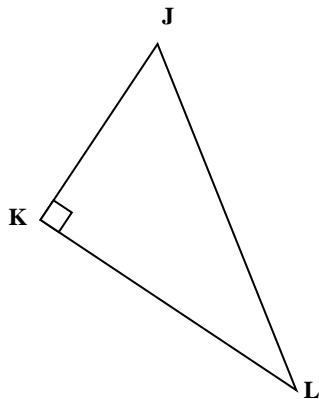
b)



$$\sin \hat{E} =$$

$$\cos \hat{F} =$$

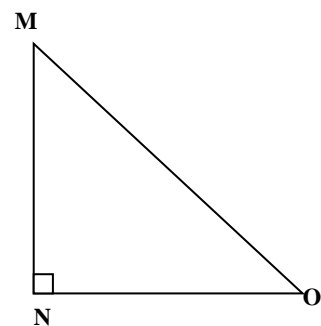
c)



$$\sin \hat{J} =$$

$$\tan \hat{L} =$$

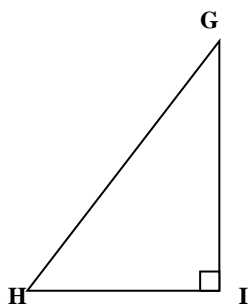
d)



$$\sin \hat{M} =$$

$$\cos \hat{M} =$$

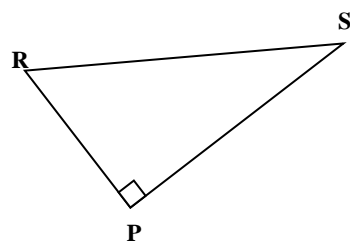
e)



$$\sin \hat{G} =$$

$$\tan \hat{H} =$$

f)



$$\tan \hat{R} =$$

$$\cos \hat{S} =$$